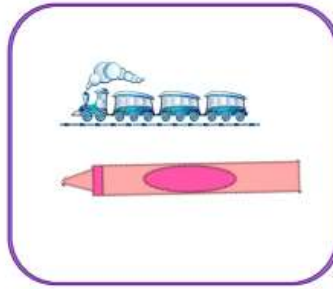




Y1 Spring Homework

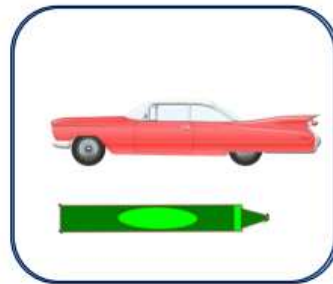

Height length

Mass and capacity

Circle the longest object in each box



Circle the shortest object in each box



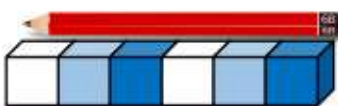
Circle the tallest object in each box



Circle the shortest object in each box

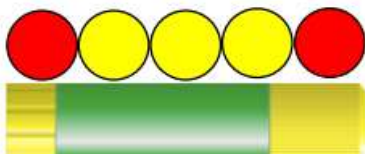


The pencil is \_\_\_\_\_ cubes long.



My pencil is \_\_\_\_\_ cubes long.

The glue stick is \_\_\_\_\_ counters long.



The \_\_\_\_\_ is \_\_\_\_\_ counters long.

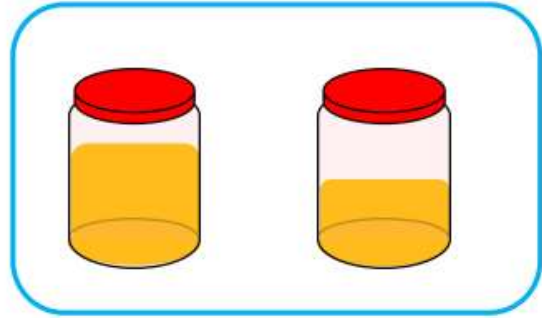
Circle the heaviest object in each picture



Circle the lightest object in each picture




Circle the container with the most liquid



Circle the container with the least liquid



Draw a line on the cups to show the given capacity.



quarter full

half full

half empty

nearly empty